
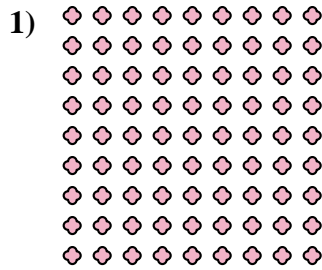




Write each array as a multiplication problem and solve.



Answers

Ex. 3 × 10 = 30

1. _____

2. _____

3. _____

4. _____

5. _____

6. _____

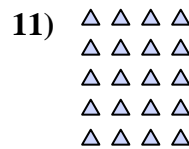
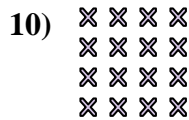
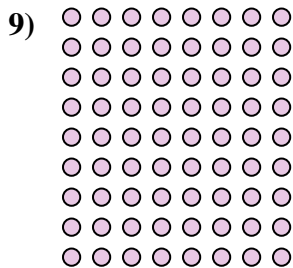
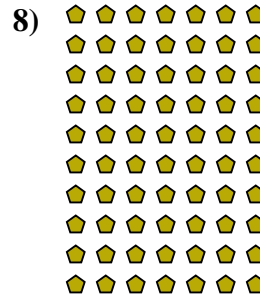




7. _____

8. _____

9. _____

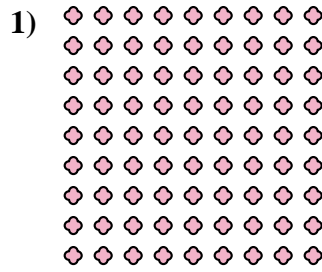
10. _____

11. _____





Write each array as a multiplication problem and solve.



Answers

Ex. $3 \times 10 = 30$

1. $9 \times 9 = 81$

2. $10 \times 10 = 100$

3. $4 \times 8 = 32$

4. $9 \times 2 = 18$

5. $6 \times 9 = 54$

6. $4 \times 9 = 36$

7. $6 \times 5 = 30$

8. $10 \times 7 = 70$

9. $9 \times 8 = 72$

10. $4 \times 4 = 16$

11. $5 \times 4 = 20$

